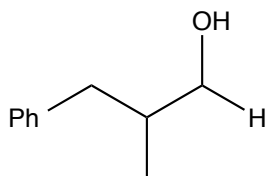
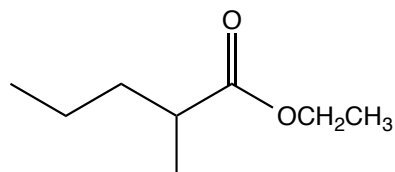
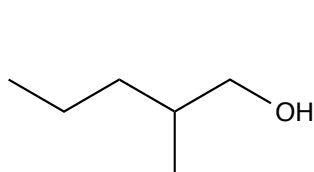
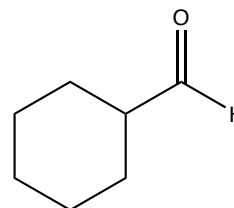
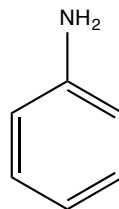
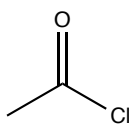
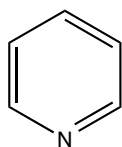
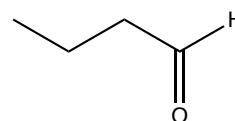
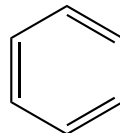
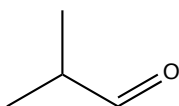
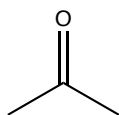


1. Propose plausible syntheses for the following two molecules. You can only use those organic molecules found in the Toolbox below and any inorganic reagents.



**Toolbox**



nBuLi

CH<sub>3</sub>I

