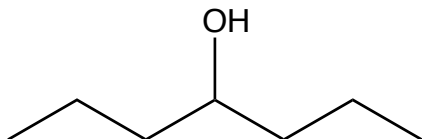
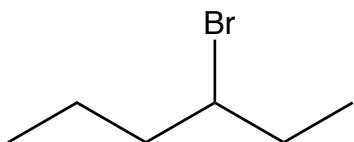


1. Indicate the number of peaks that the ^1H and ^{13}C -NMR spectra of each of the following molecules would contain?

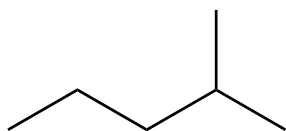
a)



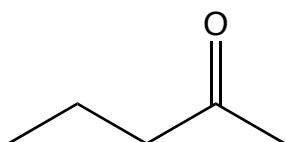
b)



c)



d)



e)

