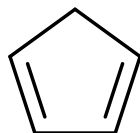


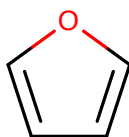
You can use this page or another sheet to indicate your answer.

- 1) Indicate whether each of the following molecules are aromatic, non-aromatic, or anti-aromatic.

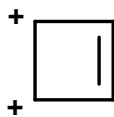
a)



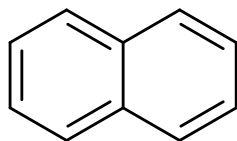
b)



c)



d)



e)

