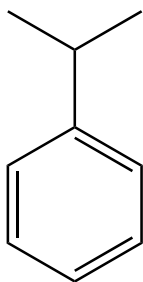


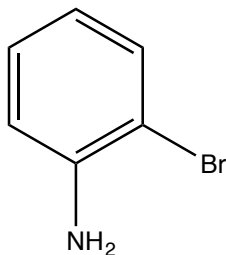
USE A SEPARATE SHEET OF PAPER TO ANSWER THE FOLLOWING QUESTIONS.

1) Provide names for the following compounds:

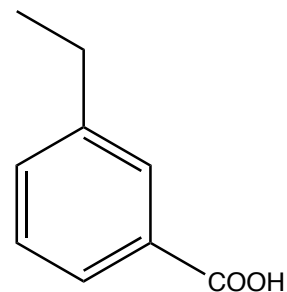
a)



b)



c)



2) Provide structures for the following compounds:

a) *m*-propylstyrene

b) *p*-xylene