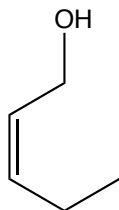
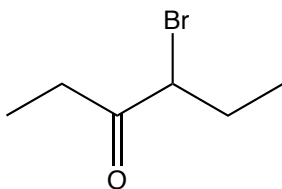


1) Provide names for the following compounds:

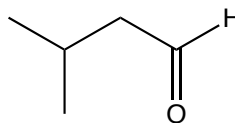
a)



b)



c)



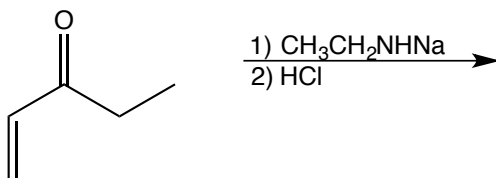
2) Provide structures for the following compounds:

a) Isobutyl alcohol

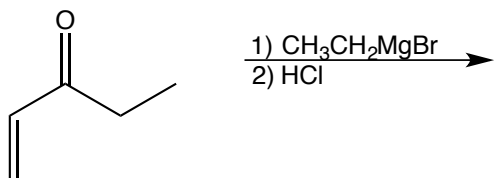
b) acetophenone

3) Provide the products produced from each of the following reactions.

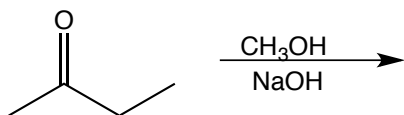
a)



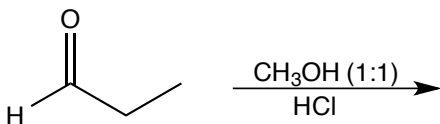
b)



c)



d)



e)

