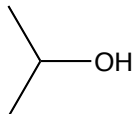


1. Provide the IUPAC & common names for the following molecules. Also classify the alcohols as primary, secondary, or tertiary.

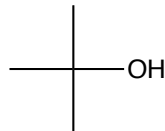
a)



b)



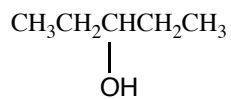
c)



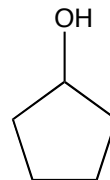
d)



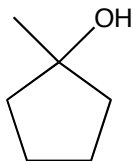
e)



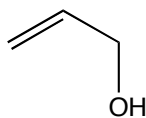
f)



g)



h)



i)

