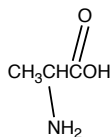
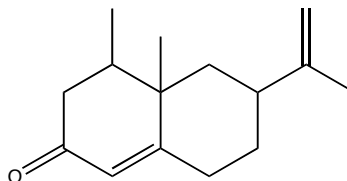


1. Locate (circle) and identify (place name near appropriate circle) the functional groups in the following molecules.

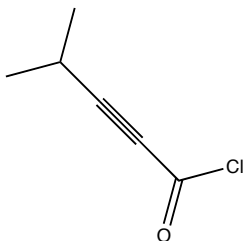
(a)



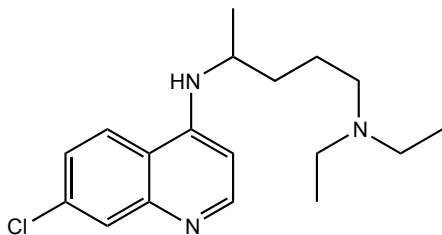
(b)



(c)



(d)



(e)

